

Name : \_\_\_\_\_


Score : \_\_\_\_\_


Teacher : \_\_\_\_\_

Date : \_\_\_\_\_

## Interpreting Pictographs

Miles tracked the number of cupcakes he baked over seven months.  
Answer the questions based on the pictograph below.



 = 12 cupcakes

- 1) How many cupcakes did Miles bake during July? \_\_\_\_\_
- 2) During which month did Miles bake the fewest number of cupcakes? \_\_\_\_\_
- 3) In total, how many cupcakes did Miles bake in the tracked months? \_\_\_\_\_
- 4) Did Miles bake more cupcakes in the month of June or in July? \_\_\_\_\_
- 5) During which month did Miles bake the greatest number of cupcakes? \_\_\_\_\_
- 6) If in any one month Miles bakes at least 90 cupcakes, then Miles can sell extra cupcakes to make money. Which months did Miles get to sell extra cupcakes? If that never occurred, write 'None'. \_\_\_\_\_
- 7) How many cupcakes were baked by Miles in the month of May? \_\_\_\_\_

Name : \_\_\_\_\_


Score : \_\_\_\_\_

Teacher : \_\_\_\_\_

Date : \_\_\_\_\_

## Interpreting Pictographs

Miles tracked the number of cupcakes he baked over seven months.  
Answer the questions based on the pictograph below.



- 1) How many cupcakes did Miles bake during July? 36
- 2) During which month did Miles bake the fewest number of cupcakes? June
- 3) In total, how many cupcakes did Miles bake in the tracked months? 504
- 4) Did Miles bake more cupcakes in the month of June or in July? July
- 5) During which month did Miles bake the greatest number of cupcakes? October
- 6) If in any one month Miles bakes at least 90 cupcakes, then Miles can sell extra cupcakes to make money. Which months did Miles get to sell extra cupcakes? If that never occurred, write 'None'. April, September, October
- 7) How many cupcakes were baked by Miles in the month of May? 24